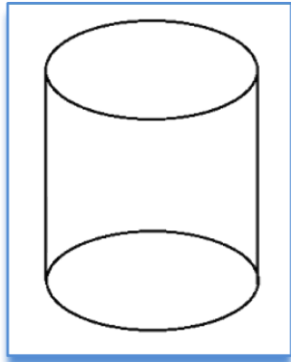


## 3D shapes names and sides

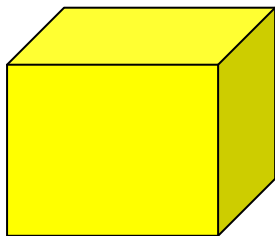
Name\_\_\_\_\_ Date\_\_\_\_\_

**Name the 3D shape and number of their faces.**



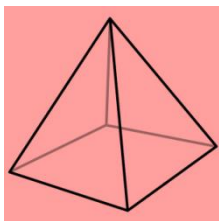
1-Name of shape.\_\_\_\_\_

Number of faces.\_\_\_\_\_



2-Name of shape.\_\_\_\_\_

Number of faces.\_\_\_\_\_



3-Name of shape.\_\_\_\_\_

Number of faces.\_\_\_\_\_



4- Name of shape.\_\_\_\_\_

Number of faces.\_\_\_\_\_