


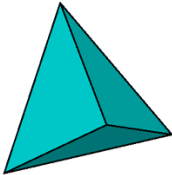




Properties of 3D shapes

Name::_____ Date::_____

Write the names, number of edges, faces and vertices of following shapes.

	<p>Name:_____</p> <ul style="list-style-type: none">• edges:_____• faces :_____• vertices:_____
	<p>Name:_____</p> <ul style="list-style-type: none">• edges:_____• faces :_____• vertices:_____
	<p>Name:_____</p> <ul style="list-style-type: none">• edges:_____• faces :_____• vertices:_____
	<p>Name:_____</p> <ul style="list-style-type: none">• edges:_____• faces :_____• vertices:_____
	<p>Name:_____</p> <ul style="list-style-type: none">• edges:_____• faces :_____• vertices:_____
	<p>Name:_____</p> <ul style="list-style-type: none">• edges:_____• faces :_____• vertices:_____