


## Line of Symmetry of 2D shapes

Name::\_\_\_\_\_ Date::\_\_\_\_\_


Draw the line of symmetry on these shapes. Write the number of lines of symmetry for each shape.

**a**




lines of symmetry.

**b**




lines of symmetry.

**c**



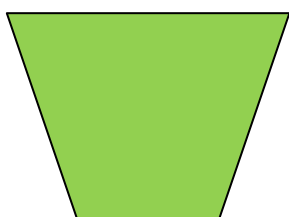
lines of symmetry.

**d**




lines of symmetry.

**e**



lines of symmetry.

**f**



lines of symmetry.