







Position of Object on Grid

Name::_____ Date::_____

Tell the position of object in the grid. One is done for you.

	A	B	C	D	E	F
1						
2						
3						
4						
5						

Place of book on the grid is **A1**.

Place of kite on the grid is _____

Place of apple on the grid is _____

Place of spoon on the grid is _____

Place of ball on the grid is _____

Place of door on the grid is _____