

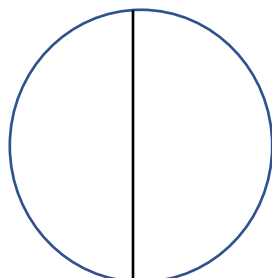
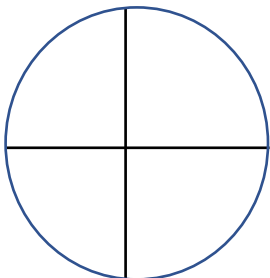
Year 2 – Fractions

Name:

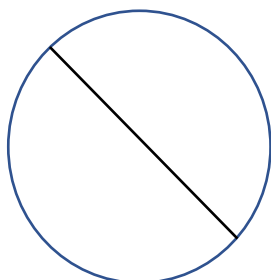
Date:

Tick the correct one.

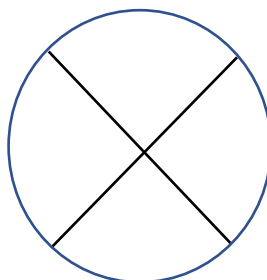
1-Which figure shows a half?.



2-Which one is correct?

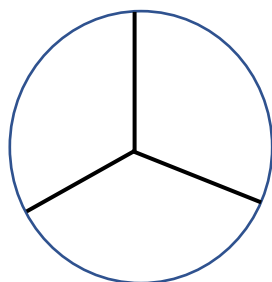



$\frac{3}{4}$



$\frac{1}{4}$

3-Which figure shows two thirds?



4-Colour in 2 sections in each shape. Write its fractions.

