






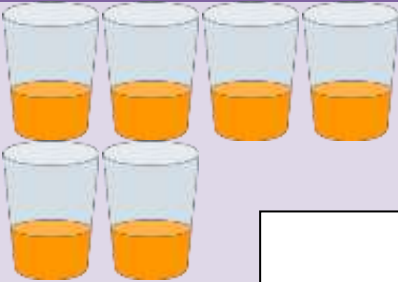






Reception: Addition of two Numbers

Name: _____

 <input type="text" value="1"/>	+	 <input type="text" value="2"/>	=	3
 <input type="text"/>	+	 <input type="text"/>	=	
 <input type="text"/>	+	 <input type="text"/>	=	
 <input type="text"/>	+	 <input type="text"/>	=	
 <input type="text"/>	+	 <input type="text"/>	=	
 <input type="text"/>	+	 <input type="text"/>	=	

Reception: Addition of two Numbers

Solve the following.