


Represent Numbers - up to 20.

Name: _____ Date: _____

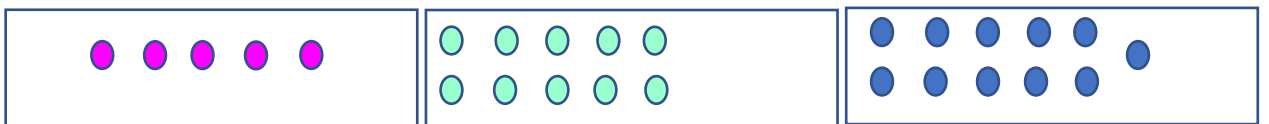
1) Which group shows 2 dots. Tick the correct one.




2) Which group shows 5 dots. Tick the correct one.



3) Which groups shows 11 dots. Tick the correct one.



4) Which group shows 18 dots. Tick the correct one.



5) Which groups shows 20 dots. Tick the correct one.

