


# NAME THAT POLYGON!


Can you name these polygons according to the number of their sides?




Four sides




Five sides




Six sides



Seven sides



Eight sides



Nine sides

Name: \_\_\_\_\_

Date: \_\_\_\_\_

Section: \_\_\_\_\_

Score: \_\_\_\_\_

Name:

Date:

Section:

Score:

# FUN WITH DINOS!

Let's add and subtract some dinos!

Add or subtract the dinosaurs.  
Write the correct answer on the space provided.

