



Identify the 2D shapes.

Name: _____

Tick the correct.

Which shape is a Triangle?




Which shape is an Oval?



Which shape is a Square?



Which shape is a Rectangle?



Which shape is a Diamond?

