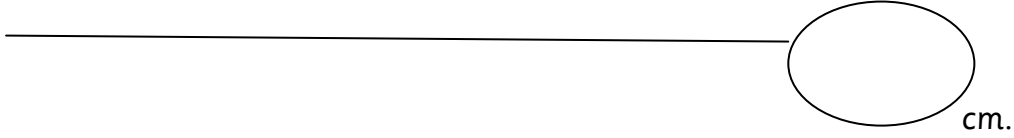


Measuring length.


Name: _____ Date _____.

1 Use a ruler to measure each of these lengths in centimetres.

A





B



C



2 Draw lines to join these objects to the most likely length. (Estimating the length).



2m

20m

30cm

20cm