

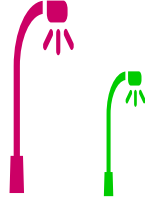
Year 1 – Length Measurement Worksheet

Name:


Date:

Tick the correct picture?

1. Which lamp is taller?




2. Which giraffe is taller?




3. Which is the tallest fence?



4. Which lighthouse is shorter?



5. Which tree is shorter?



6. Which building is the shortest?

