

YEAR 1

MATH

Addition

WORKBOOK




Name :


Class :

Dice Addition



Fill the result of the addition from the dice in the box provided.




+





=




+





=




+





=




+




=




+




=








+





=




+




=




+





=




+





=




+




=




+



=





Let's Count 1 to 100

Write the missing numbers.

1 3 6 8 9

11 14 15 17 19 20

21 22 24 26 28 29

 32 33 35 37 39 40

41 42 44 46 48 49


 53 55 56 57 58 60

61 62 64 65 67 69 70

 72 73 74 76 77 78

81 83 85 87 89




91 92 93 94 96 98 99



FRUIT ADDITION


Name: _____

Date: _____



TRACING SKILLS

Carefully trace along the dotted line then color the picture.









Name:

Class:

Count and Match

Match groups of dinosaurs
that have the same number!




Name _____


Date _____

SUBTRACTION


Subtract and write the correct answer in the box.




$$8 - 4 =$$




$$9 - 5 =$$



$$9 - 6 =$$



$$7 - 5 =$$



$$8 - 6 =$$


Name: _____

Class: _____


Count and Color

Color the fruit based on the given numbers


5




3




7




6




9



8



4

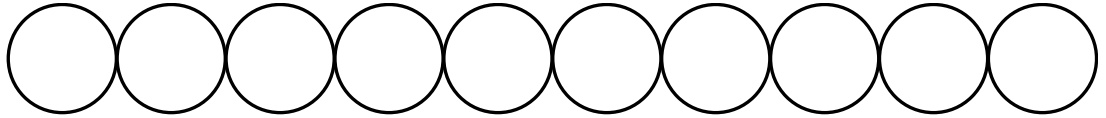


Name: _____

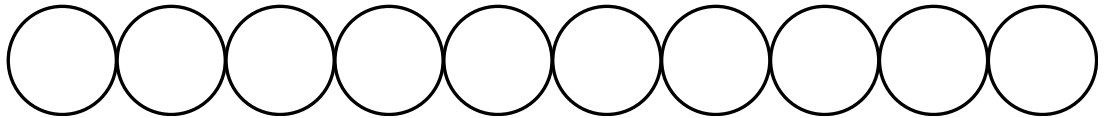
Numbers to 10

Colour the amount of circles represented by each number:

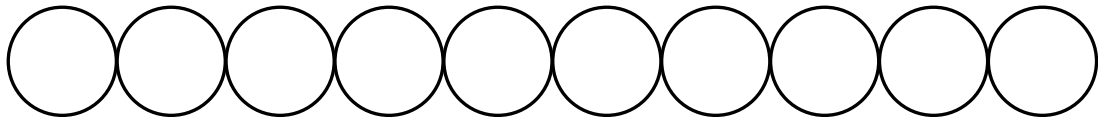
3



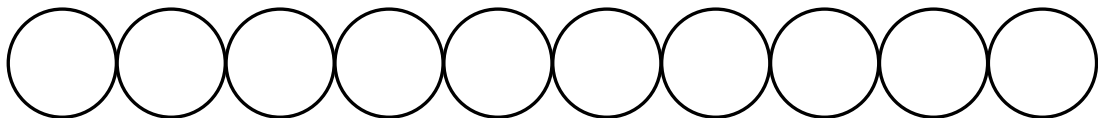
8



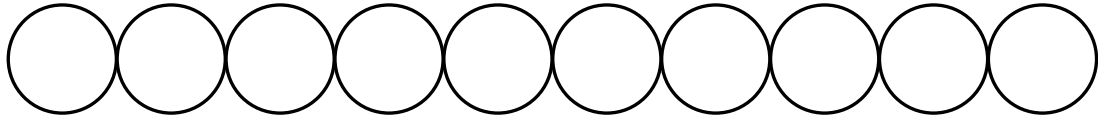
2



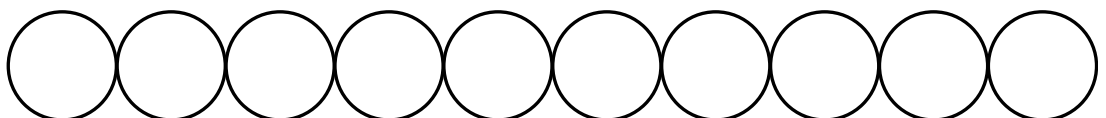
5



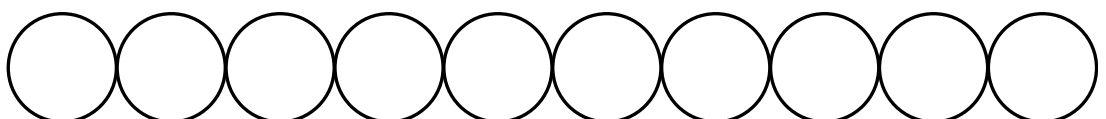
1



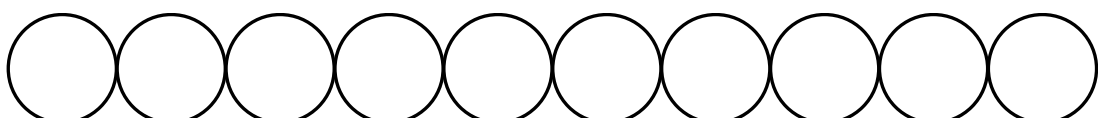
10



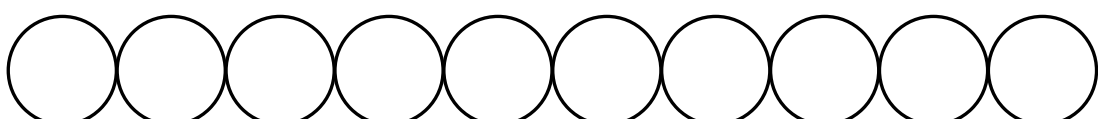
4



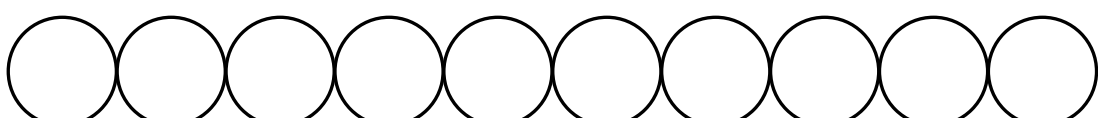
7



9



6



Addition Drills

Name: _____

Date: _____

$$\begin{array}{r} 10 \\ + 5 \\ \hline \end{array}$$

$$\begin{array}{r} 11 \\ + 3 \\ \hline \end{array}$$

$$\begin{array}{r} 12 \\ + 7 \\ \hline \end{array}$$

$$\begin{array}{r} 17 \\ + 2 \\ \hline \end{array}$$

$$\begin{array}{r} 10 \\ + 6 \\ \hline \end{array}$$

$$\begin{array}{r} 20 \\ + 4 \\ \hline \end{array}$$

$$\begin{array}{r} 26 \\ + 3 \\ \hline \end{array}$$

$$\begin{array}{r} 23 \\ + 7 \\ \hline \end{array}$$

$$\begin{array}{r} 22 \\ + 5 \\ \hline \end{array}$$

$$\begin{array}{r} 24 \\ + 2 \\ \hline \end{array}$$

$$\begin{array}{r} 31 \\ + 5 \\ \hline \end{array}$$

$$\begin{array}{r} 34 \\ + 3 \\ \hline \end{array}$$

$$\begin{array}{r} 37 \\ + 3 \\ \hline \end{array}$$

$$\begin{array}{r} 34 \\ + 4 \\ \hline \end{array}$$

$$\begin{array}{r} 32 \\ + 7 \\ \hline \end{array}$$

$$\begin{array}{r} 43 \\ + 5 \\ \hline \end{array}$$

$$\begin{array}{r} 46 \\ + 3 \\ \hline \end{array}$$

$$\begin{array}{r} 44 \\ + 5 \\ \hline \end{array}$$

$$\begin{array}{r} 48 \\ + 2 \\ \hline \end{array}$$

$$\begin{array}{r} 45 \\ + 4 \\ \hline \end{array}$$

$$\begin{array}{r} 53 \\ + 6 \\ \hline \end{array}$$

$$\begin{array}{r} 56 \\ + 2 \\ \hline \end{array}$$

$$\begin{array}{r} 54 \\ + 5 \\ \hline \end{array}$$

$$\begin{array}{r} 51 \\ + 9 \\ \hline \end{array}$$

$$\begin{array}{r} 55 \\ + 3 \\ \hline \end{array}$$